

# ***Cones and Cylinders***

## ***Here's How***

Look at these shapes.



**cone**

A cone is like  
an ice cream cone.



**cylinder**

A cylinder is  
like a can.

## ***Try These***

Ring each cone.

Put an X on each cylinder.

1.



2.



3.

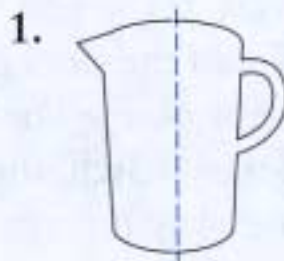


**Answers:** 1. X first figure, ring around third figure  
2. ring around first figure, X on third figure  
3. ring around second figure, X on third figure

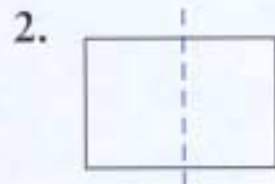
If you folded the shape, would both sides match? Ring yes or no.

**TIP**

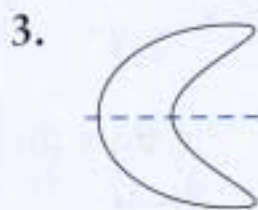
When both sides are the same, a figure is symmetrical.



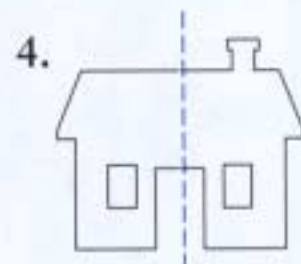
yes      no



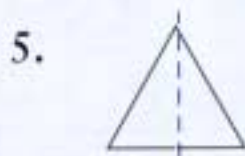
yes      no



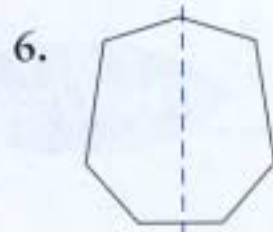
yes      no



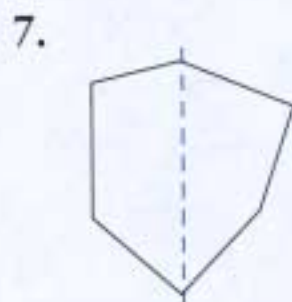
yes      no



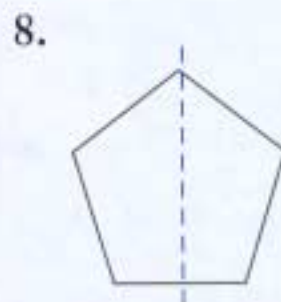
yes      no



yes      no



yes      no



yes      no