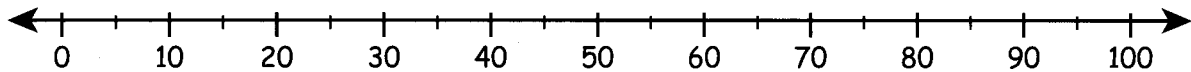


It rained for 40 minutes in the morning and 35 minutes in the afternoon. How many minutes did it rain that day?




1. a. Draw jumps on this number line to show how you could count on to figure out the total.



- b. Write the answer. $40 + 35 =$ _____

What did you do?

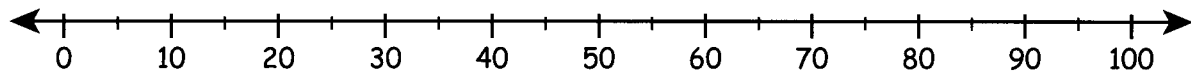


2. Suppose it rained for 25 minutes then another 50 minutes.

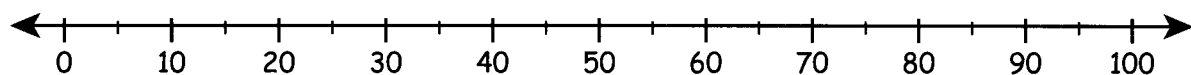
- a. Complete the number sentence.

$$25 + \underline{\quad\quad} = \underline{\quad\quad}$$


- b. Show how you did it.



- c. Show another way you could count on to the total.



Name: _____



1. Figure out each of these in your head. Write the answer.
Draw jumps to show how you did it.

a. $60 + 35 =$ _____

b. $50 + 15 =$ _____

c. $25 + 30 =$ _____

2. Figure out each of these in your head. Write the answer.

a. $40 + 45 =$ _____ b. $15 + 30 =$ _____ c. $75 + 20 =$ _____

d. $60 + 25 =$ _____ e. $20 + 65 =$ _____ f. $55 + 30 =$ _____

3. Complete an addition sentence to describe each of these.

a. _____ + _____ = _____

b. _____ + _____ = _____