


WARM UP


Name: _____

Gemma had \$5. Her mother gave her \$1 more. How much money does she have?



1. Write the number fact.

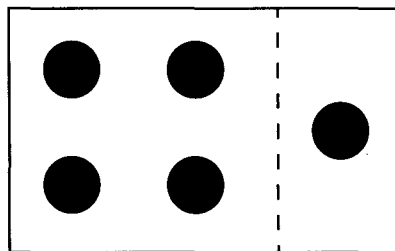
$$\underline{\quad 5 \quad} + \underline{\quad \quad} = \underline{\quad \quad}$$



How did you figure it out in your head?

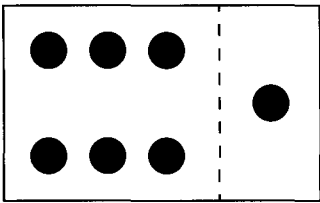
2. Look at this count-on card. Complete the number fact.

$$\underline{\quad 4 \quad} + \underline{\quad 1 \quad} = \underline{\quad \quad}$$

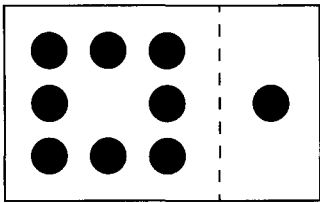


3. Write a number fact for each of these. Write the turnaround fact.

a.

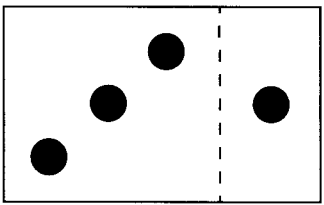

$$\underline{\quad \quad} + \underline{\quad \quad} = \underline{\quad \quad}$$
$$\underline{\quad \quad} + \underline{\quad \quad} = \underline{\quad \quad}$$

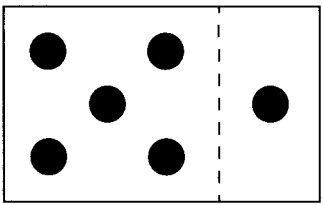
b.



$$\underline{\quad \quad} + \underline{\quad \quad} = \underline{\quad \quad}$$
$$\underline{\quad \quad} + \underline{\quad \quad} = \underline{\quad \quad}$$


Name: _____

1. Write a number fact to show each total.

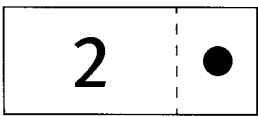
a. 
 _____ + _____ = _____


b. 
 _____ + _____ = _____

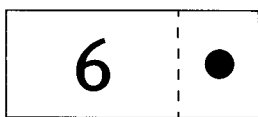
c. 
 _____ + _____ = _____

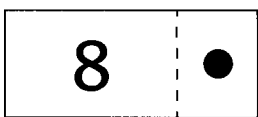
d. 
 _____ + _____ = _____

2. Write the number fact then write the turnaround fact.

a. 
 _____ + _____ = _____
 _____ + _____ = _____

b. 
 _____ + _____ = _____
 _____ + _____ = _____

c. 
 _____ + _____ = _____
 _____ + _____ = _____

d. 
 _____ + _____ = _____
 _____ + _____ = _____