

LEVEL



NUMBER WORLDS™

Accelerate Math Success

Assessment

Test Instructions



Use the questions below with the following page to evaluate student performance this week. If students have difficulty with an individual item or items, review the associated Warm Ups and activities. If students show understanding of all the items on this assessment, they should move on to the next week of **Number Worlds**.

Lesson 1

- 1.** I had 3 balloons. My friend gave me 2 more. How many balloons do I have now? Circle the correct number story. Students should draw a circle around $3 + 2 = 5$.

If a student has difficulty with this item, review

- **Activity Card 31**, Counter Dropping
- **Activity Card 46**, How Many Balloons?

Lesson 2

- 2.** Write the answer. 13

If a student has difficulty with this item, review

- **Activity Card 38**, Flip, Add, and Compare
- **Activity Card 47**, And the Answer Is . . .

Lesson 3

- 3.** I have 3 fish. My sister has 4 fish. How many do we have all together? Circle the correct number story. Students should draw a circle around $3 + 4 = 7$.

If a student has difficulty with this item, review

- **Activity Card 31**, Counter Dropping
- **Activity Card 46**, How Many Balloons?

Lesson 4

- 4.** Write the answer. 13

If a student has difficulty with this item, review

- **Activity Card 38**, Flip, Add, and Compare
- **Activity Card 47**, And the Answer Is . . .

Name _____


Date _____

WEEK **26****Test**


1. $3 + 2 = 5$

$3 + 5 = 2$

2.



+




=

3.


$3 + 3 = 6$

$3 + 4 = 7$

4.




+



=

LEVEL



Assessment

978-0-02-129425-1
MHID 0-02-129425-9

