

Name .....

Date .....

Score .....

# Performance Task



## The Pet Store

Mr. Smith's class visited the Pet Store.

Show all your work to receive full credit.




### Part A

Circle the fish bowl that has zero fish.



### Part B

Count the number of fish. Write the number.



\_\_\_\_\_

-----

\_\_\_\_\_

### Part C

Count the number of crabs. Circle the number that is one more than that number.



3

4

5

### Part D

Circle the nest with 5 birds.



### Part E

Circle the group that has more chickens.

